



Mozaïek: vergelijkingen


Los de vergelijking op en kleur in het rooster hieronder het vakje met de oplossing(en) hetzelfde als het patroon.




$$x^2 - 9 = 0$$




$$x^2 + 2x = 3$$




$$x^2 - 4 = 0$$




$$x^2 - 2 = x$$




$$x^2 + x = 0$$




$$x^2 + 2x = 0$$




$$x^2 - 1 = 0$$




$$x^2 - 5x = -6$$




$$x^2 - x = 6$$




$$x^2 + x - 2 = 0$$



$$x^2 + 3x + 2 = 0$$




$$x^2 + 6x + 9 = 0$$




$$x^2 + x = 6$$


-1 1	-2 1	-3 3	2 3	-1
0 2	-1 3	-3 1	-3 2	-2 0
-2 2	-3 -2	1 2	1 3	-2 3
-3 -1	0 3	-2 -1	-3	2
-1 2	-1 0	3	-2	0 1




$$x^2 + 9 = 6x$$



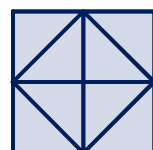
$$x^2 - 3x = 0$$




$$x^2 + 2x + 1 = 0$$




$$x^2 + 4x + 3 = 0$$




$$x^2 - 4x + 3 = 0$$




$$x^2 + 4 = 4x$$




$$x^2 + 5x + 6 = 0$$




$$x^2 - 3x = -2$$




$$x^2 - 2x = 3$$



$$x^2 + 4x + 4 = 0$$



$$x^2 = 2x$$



$$x^2 = x$$